



Name _____ Block _____

Solve the system of inequalities by graphing.




1) $y > x - 3$
 $y \leq 2$

Are these points solutions?
(2, -2) (5, 2)




2) $x < 3$
 $y > 0$

Are these points solutions?
(3, 0) (0, 3)



3) $3x + y \leq 3$
 $y > -3x - 2$

Are these points solutions?
(-1, 2) (1, 1)



4) $y > \frac{3}{2}x$
 $x + y \geq -4$

$y \leq \frac{1}{2}x + 2$