




Name _____ Block _____




1) $y = -x + 3$
 $y = x + 1$




2) $y = 2x - 4$
 $y = -\frac{1}{2}x + 1$




3) $y = x$
 $y = -\frac{1}{3}x - 4$




4) $y = x - 1$
 $y = 3x - 5$




5)
$$\begin{aligned} -3x + y &= -3 \\ x - 2y &= 6 \end{aligned}$$



6)
$$\begin{aligned} x + 2y &= 3 \\ 3x + y &= -6 \end{aligned}$$



7)
$$\begin{aligned} 2x - 3y &= 9 \\ x &= -3 \end{aligned}$$



8)
$$\begin{aligned} 14x + 7y &= 42 \\ -14x + 7y &= 14 \end{aligned}$$