



Name \_\_\_\_\_ Block \_\_\_\_\_

Graph the Inequality.


1)  $y < -x^2$




2)  $y \geq x^2 - 3x$




3)  $y > -2x^2 - x + 3$



4)  $y \leq x^2 - x - 6$



5)  $y < -3x^2$   
 $y \geq -\frac{1}{2}x^2 - 5$



6)  $y \geq x^2 + 2x + 1$   
 $y > x^2 - 4x + 4$

