



Name _____ Block _____

Parallel lines.


Graph both lines on the same grid.




1) $y = 3x + 1$
 $y = 3x - 3$




2) $y = -x + 3$
 $y = -x$



3) $x - 2y = -2$
 $x - 2y = 6$




4) $2x + y = 3$
 $2x + y = -1$




$$y = 2x + 1$$

5) $y = -\frac{1}{2}x - 4$




$$y = \frac{2}{3}x + 2$$

6) $y = -\frac{3}{2}x + 1$



7) $3x - y = 2$
 $x + 3y = 3$



8) $3x + 4y = 16$
 $4x - 3y = 6$