

Name \_\_\_\_\_ Block \_\_\_\_\_

Match the graph to the equation.

1)  $y = -3^{x+1} + 2$

2)  $y = \frac{1}{2}(3^x)$

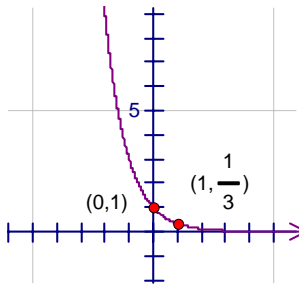
3)  $y = \log x$

4)  $y = \left(\frac{1}{3}\right)^x$

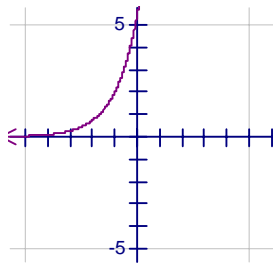
5)  $y = 2e^{x+1}$

6)  $y = \log(x - 3)$

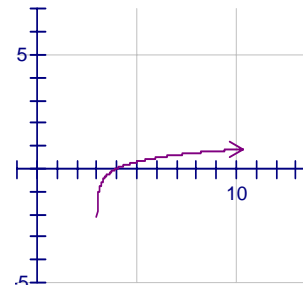
A



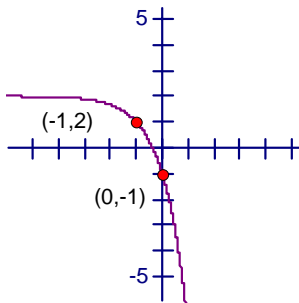
B



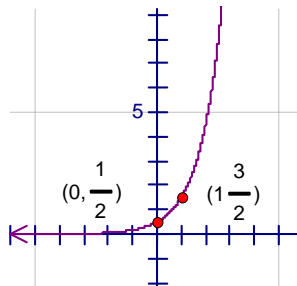
C



D



E



F

