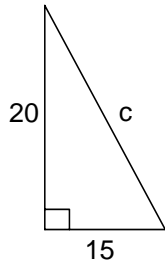


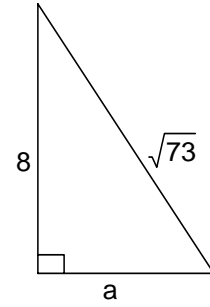
Name _____ Block _____

Use the Pythagorean Theorem to find the unknown length:

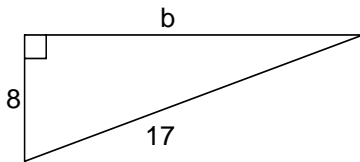
1)



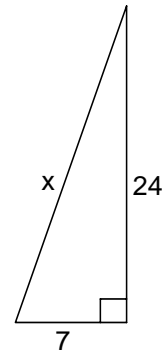
2)



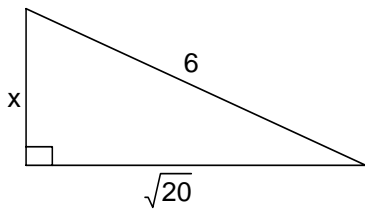
3)



4)



5)



6)

